



Name: _____

Date: _____

Time: 90 minutes

Please, write down your name in all the solution pages

Please read the information carefully

1. In Figure 1, four particles form a square. The charges are $q_1 = q_4 = Q$ and $q_2 = q_3 = q$. Consider the electrostatic constant equal to K . Determine (2.5 points)

(a) The net vector of Coulombian force (\mathbf{F}_e) acting in particle q_3 .

(b) Sketch the net vector \mathbf{F}_e acting in particle q_3 .

(c) The ratio Q / q for which the net vector of Coulombian force (\mathbf{F}_e) in particle 3 to be null

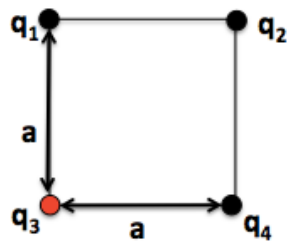


Figure 1

2. (2.5 points) Consider the charges arrangement shown in Figure 1, evaluate

(a) The electric field vector at the point P located in the center of the square

(b) Consider the charges q_1, q_2, q_3, q_4 positioned very close to each other at point P . Use Gauss's law to calculate the electric field produced by this charge distribution at a radial distance $d = 2a$.

3. (2.5 pontos) Figure 2 shows the cross section of a long, conductive, hollow cylinder with inner radius a and outer radius b ($b > a$). The cylinder conducts an electric current out of the paper plane. The modulus of current density in the cylinder cross section is given by $\mathbf{J} = c \mathbf{r}$, where c is a constant and r is the radial distance measured from the center of the wire. Calculate the magnetic field vector in the following situations

- a) For P1 placed at r , with $a < r < b$.
- b) For P2 placed at $r > b$
- c) For P3 placed at $r < a$

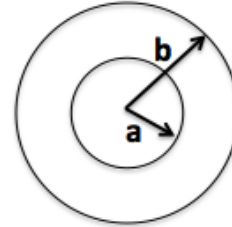


Figure 2

4. (2.5 pontos) A capacitor of circular parallel plates is being charged by a constant current i (Figure 3). The electric field \mathbf{E} between the plates is uniform, directed into the paper (toward the plate) and increases in intensity as the capacitor charge increases. For the region between the capacitor plates, write

- (a) Faraday law's in the integral form
- (b) Ampère-Maxwell's law in the integral form (with no current sources)
- (c) Skeeth in Figure 4 the induced magnetic field vector on the negatively charged plate of the capacitor..

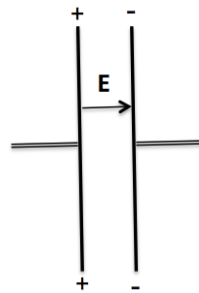


Figure 3

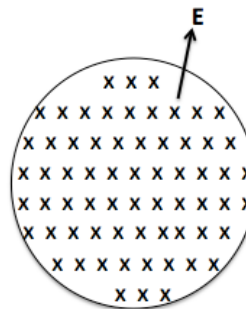


Figure 4